


15-122: Principles of Imperative Computation, Spring 2013

Homework 1 Programming: Imagelab

Due: Monday, February 4, 2013 by 23:59



For the programming portion of this week's homework, you'll review how images are stored in the computer using C0 (described in Section 1), and then you'll write four C0 files: `imageutil.c0` (described in Section 1.1), `quantize.c0` (described in Section 2.1), `reflect.c0` (described in Section 2.2), and `mask.c0` (described in Section 2.3). You'll also have an opportunity to design your own image processing function (described in Section 2.4).

You should submit your code electronically by 11:59 pm on the due date. Detailed submission instructions can be found below.

Assignment: Image Manipulation (25 points)

Starter code. Download the file `hw1-handout.tgz` from the course website or Autolab. When you unpack it, you will find a number of files.

Four of the files are `imageutil.c0`, `quantize.c0`, `reflect.c0`, and `mask.c0`, which are where you will write your solution to the required image manipulation problems below. These four files are the only files that you should submit for these problems. Note that you should not write a `main()` function in any of these files. You will also see several `*-main.c0` files, which contain the `main()` functions for each task. These can be used to compile and test your code. Finally, there is `manipulate.c0` and `manipulate-main.c0`, for the optional manipulation described in Section 2.4.

In addition, you will find a sample manipulation `remove-red.c0`, which removes the red channel from each pixel of an image, and its associated main file `remove-red-main.c0`. This sample provides a complete program that you can compile and execute, and you may pattern your code after the code in `remove-red.c0` if you find it convenient to do so. (The code for the `remove_red` function also appears in Appendix A.)

Finally, you will also see an `images/` directory with some sample input images and some sample outputs for some of the manipulations. On a Linux cluster machine, there are several programs you can use to view the images, including `display`, `gpicview`, `qiv`, `eog`, and `gthumb`. Play around and find one you like.

Compiling and running. To compile one of your completed exercises just specify the file(s) on the command line in the order you want them compiled. You can compile your files on any Andrew system by running the command

```
cc0 <file1>.c0 <file2>.c0 <file3>.c0 -o <executablefilename>
```

from the directory where your `c0` files reside. This will place the compiled binary in the file `<executablefilename>` rather than the usual default `a.out`.

Once you've compiled `<executablefilename>` in this way, you can run it with the command

```
./<executablefilename>
```

The file so produced will expect some options of its own, at the very least an option `-i <input file>` specifying the input image to manipulate. If you run one of the programs without any arguments, you will get a short usage message explaining the options particular to that program.

As a concrete example, you can compile the `remove-red` filter with dynamic checking and run it on the sample image `g5.png` in the `images/` directory by running the following commands in sequence:

```
cc0 -d remove-red.c0 remove-red-main.c0 -o remove-red
```

```
./remove-red -i images/g5.png -o images/g5nored.png
```

If you have any problems compiling or running your code as described here, you should contact the course staff.

Submitting. Once you've completed some files, you can submit them to Autolab. There are two ways to do this:

From the terminal on Andrew Linux (via cluster or ssh) type:

```
handin hw1 imageutil.c0 quantize.c0 reflect.c0 mask.c0 manipulate.c0
```

Your score will then be available on the Autolab website.

Your files can also be submitted to the web interface of Autolab. To do so, please tar them, for example:

```
tar -czvf sol.tgz imageutil.c0 quantize.c0 reflect.c0 mask.c0 manipulate.c0
```

Then, go to <https://autolab.cs.cmu.edu/15122-f12> and submit them as your solution to homework 1.

You may submit your assignment up to 25 times. When we grade your assignment, we will consider the most recent version submitted before the due date. If you get any errors while trying to submit your code, you should contact the course staff immediately.

Testing. You are encouraged to use the provided `*-main.c0` files to help you test your code. Feel free to write additional testing code of your own before submitting to Autolab – don't rely on the grader's output for debugging. For this assignment, we are providing a program, `imagediff` to help you compare your output images to the sample images in the handout, optionally saving an image that shows you exactly where the two images differ. It is in the course directory on `afs`, so it is available on any cluster machine or when you are connected via ssh. For example:

```
imagediff -i images/sample.png -j images/my-image.png -o images/diff.png
```

Annotations. Be sure to include `//@requires`, `//@ensures`, and `//@loop_invariant` annotations in your program. You should write these as you are writing the code rather than after you're done: documenting your code as you go along will help you reason about what it should be doing, and thus help you write code that is both clearer and more correct. Proper use of annotations will be tested by Autolab and will be a component of your style grade.

Style. Strive to write code with *good style*: indent every line of a block to the same level, use descriptive variable names, keep lines to 80 characters or fewer, document your code with comments, etc. If you find yourself writing the same code over and over, you should write a separate function to handle that computation and call it whenever you need it. We will read your code when we grade it, and good style is sure to earn our good graces. Feel free to ask on Piazza if you're unsure of what constitutes good style.

Task 0 (5 points) 5 points on this assignment will be given for style.

1 Image Manipulation Overview

The three short programming problems you have for this assignment deal with manipulating images. An image will be stored in a one-dimensional array of integers, where each integer is a 32-bit value representing one pixel of the image. Pixels are stored in the array row by row, left to right starting at the top left of the image. For example, if a 5×5 image has the following pixel “values”:

```

a  b  c  d  e
f  g  h  i  j
k  l  m  n  o
p  q  r  s  t
u  v  w  x  y

```

then these values would be stored in the array in this order:

```
a b c d e f g h i j k l m n o p q r s t u v w x y
```

In the 5×5 image, the pixel *i* is in row 1, column 3 (rows and columns are indexed starting with 0) but is stored in the one-dimensional array at index 8. An image must have at least one pixel.

Each pixel in the array is a 32-bit integer that can be broken up into 4 components with 8 bits each:

```
a0a1a2a3a4a5a6a7 r0r1r2r3r4r5r6r7 g0g1g2g3g4g5g6g7 b0b1b2b3b4b5b6b7
```

where:

```

a0a1a2a3a4a5a6a7 represents the alpha value (how opaque the pixel is)
r0r1r2r3r4r5r6r7 represents the intensity of the red component of the pixel
g0g1g2g3g4g5g6g7 represents the intensity of the green component of the pixel
b0b1b2b3b4b5b6b7 represents the intensity of the blue component of the pixel

```

Each 8-bit component can range between a minimum of 0 (binary 00000000 or hex 0x00) to a maximum of 255 (binary 11111111 or hex 0xFF).

For example, a pixel that is completely opaque with only green at its maximum intensity would be stored as the integer 0xFF00FF00. An opaque pixel that is medium gray would be 0xFF7F7F7F (equal parts red, green, and blue at medium intensity).

For the rest of the assignment, we will work under the assumption of a type definition that makes `pixel` an alias for `int`:

```
typedef int pixel;
```

Since `ints` are used for many other things (like the width and height of an image, for example), a type alias is useful for distinguishing those instances where we mean to interpret an `int` as an RGB pixel. This type definition is included in `imageutil.c0`, which you will work on first; use the `pixel` type when appropriate.

1.1 Creating a set of Image Utility Functions

In this problem, you will complete the implementation of the functions specified in the `imageutil.c0` file. This file contains functions that may be helpful for you in the subsequent problems. The specification (expected input and output) for each function is written in a comment above the function declaration. The preconditions and postconditions are also written out in English explicitly; you must translate these into `@ensures` and `@requires` statements.

TASK 1 (5 pts.) Complete the C0 file `imageutil.c0` that includes a number of helpful image utility functions. Include additional assertions and loop invariants as necessary. We will compile your program as follows:

```
cc0 -d imageutil.c0 imageutil-main.c0
```

using your `imageutil.c0` file. Your code must compile using these instructions with files shown in the order given.

We do not distribute a `imageutil-main.c0` file; you can check that `imageutil.c0` compiles using `coin`. You are encouraged to write your own `imageutil-main.c0` file that tests `imageutil.c0`. Do NOT include a main function in your `imageutil.c0` file.

2 Image Transformations

The rest of this assignment involves implementing a the core part of a series of transformations. Try out the `remove-red` transformation described in the “Compiling and running” instructions above if you have not already done so; the code for this transformation can be found at the end of the assignment.

Each of the pieces of starter code come without appropriate preconditions and postconditions; you should add these. For instance, it is always a precondition that the given width and height are a valid image size that matches the length of the pixel array passed to the function; the `quantize` function should have a precondition that the `q_level` argument is between 0 and 7 (inclusive), and so on. If these preconditions do not hold, your function should abort with an annotation failure when called with the `-d` flag.

Each function you write will take an array representation of the input image and return an array representation of the output image. These functions should *not* be destructive: you should make your changes in a copy of the array, and not make any changes to the original array. You may include any auxiliary functions you need in the same file, but you should not include a `main()` function.

2.1 Quantization of an Image

In this problem, you will implement a function that achieves a quantization effect on an image. Quantization reduces the total number of colors used in an image. You can see an example in Figure 1.

Given an ordinary image of size $w \times h$ and a quantization level q between 0 and 7, inclusive, for each pixel in the image, take each color component (red, green and blue) and



Figure 1: A sporty coupe with quantization level 0 (left) and level 7 (right).

clear the lowest q bits. For example, suppose the color components for a pixel are given by the bytes

```
RED      GREEN      BLUE
01101011 10111110 11010111
```

If the quantization level is 5, then the resulting pixel should have the following color components (note how the lower 5 bits are all cleared to 0):

```
RED      GREEN      BLUE
01100000 10100000 11000000
```

Note that an image processed with a quantization level of 0 should not change. For each pixel, do not change its alpha component.

TASK 2 (6 pts.) Create a C0 file `quantize.c0` with a function `quantize` matching the following prototype:

```
pixel[] quantize(pixel[] pixels, int width, int height, int q_level);
```

This function should implement the algorithm described above, given an array `pixels` representing an image of width `width` and height `height` using a quantization level `q_level`.

We will compile your program as follows:

```
cc0 -d imageutil.c0 quantize.c0 quantize-main.c0 -o quantize
```

using your `imageutil.c0` and `quantize.c0` files. Your code must compile using these instructions with files shown in the order given. Do NOT include a main function in your `quantize.c0` file. Sample usage is:

```
./quantize -i images/g5.png -q 6
```

Running this command should produce an image, `images/g5_quantize.png`, that is identical to the file `images/g5-quantize6.png` distributed with the handout.




Figure 2: Original image (left); Image after “reflection effect”

2.2 Reflection Effect

In this problem, you will create a reflection effect on an image.

Your task here is to implement a function that takes as input an image of size $w \times h$ and creates a “Reflection” image of size $2w \times 2h$ that contains the same image repeated four times, the top right image containing the original image, the top left containing the image reflected across the y-axis, the bottom right containing the image reflected across the x-axis, and the bottom left containing the image reflected across both axes. A sample image is shown in Figure 2.

TASK 3 (5 pts.) In the C0 file `reflect.c0`, complete the `reflect` function:

```
pixel[] reflect(pixel[] pixels, int width, int height);
```

where `width` and `height` represent the width and height of the original input image.

We will compile your program as follows:

```
cc0 -d imageutil.c0 reflect.c0 reflect-main.c0 -o reflect
```

using your `imageutil.c0` and `reflect.c0` files. Your code must compile using these instructions with files shown in the order given. Do NOT include a main function in your `reflect.c0` file. Sample usage is:

```
./reflect -i images/carnegie.png
```

Running this command should produce an image, `images/carnegie_reflect.png`, that is identical to the file `images/carnegie-reflect.png` distributed with the handout.

2.3 Applying Masks to an Image

In this problem, you will write a function that will apply a “mask” to an image. A mask is an $n \times n$ array of integers representing *weights*. For our purposes, n must be odd. The *origin* of the mask is its center position. For each pixel in the input image, think of the mask as being placed on top of the image so its origin is on the pixel we wish to examine. The intensity value of each pixel under the mask is multiplied by the corresponding value in the mask that covers it. These products are added together. Always use the original values for each pixel for each mask calculation, not the new values you compute as you process the image. Your function will return an array of integers the same size as the image, which contains the result of applying the mask.

Suppose we want to apply the following mask to the image:

$$\begin{bmatrix} 1 & 3 & 1 \\ 3 & 5 & 3 \\ 1 & 3 & 1 \end{bmatrix}$$

Refer to Figure 3 to see how this process works. Suppose we want to compute the value for pixel **e**. Imagine overlaying the mask so its center position is on **e**. We would compute the result for pixel *e* as:

$$a + 3b + c + 3d + 5e + 3f + g + 3h + i$$

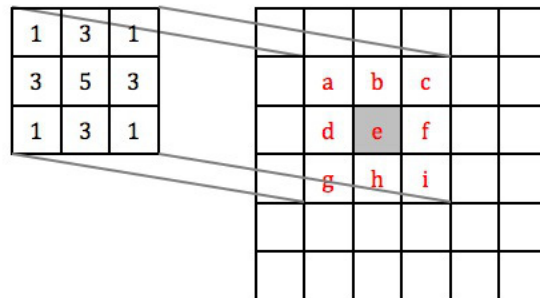


Figure 3: Overlay the 3 X 3 mask over the image so it is centered on pixel **e** to compute the new value for pixel **e**.

Instead of doing this calculation for each channel individually, use the average value of the red, green, and blue channels. Ignore the alpha channel. For example, if the pixel is given by $(a, r, g, b) = (255, 107, 9, 217)$, then use $(107 + 9 + 217)/3 = 111$.

Note that sometimes when you center the mask over a pixel you want to operate on, the mask will hang over the edge of the image. In this case, compute the weighted sum of only those pixels the mask covers. For the example shown in Figure 4, the result for the pixel **e** is given by:

$$3b + c + 5e + 3f + 3h + i$$

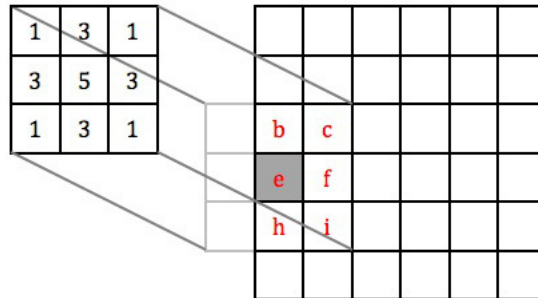


Figure 4: If the mask hangs over the edge of the image, use only those mask values that cover the image in the weighted sum.

TASK 4 (6 pts.) In the C0 file `mask.c0`, complete the `apply_mask` function:

```
int[] apply_mask(pixel[] pixels, int width, int height,
                 int[] mask, int maskwidth);
```

This function should implement the masking algorithm described above, given an array `pixels` representing an image of width `width` and height `height`, using the mask specified by `mask` and `maskwidth`. The returned array should contain the values after the mask is applied. You may include any auxiliary functions you need in the same file, but you should not include a `main()` function. As before, if the width and height are not a valid image size, if the supplied image does not match the size given by width and height, if the size of the mask does not agree with `maskwidth`, or if `maskwidth` is not odd, then your function should abort with an annotation failure when compiled and run with the `-d` flag.

We will compile your program as follows:

```
cc0 -d imageutil.c0 mask.c0 maskblur-main.c0 -o maskblur
cc0 -d imageutil.c0 mask.c0 maskededge-main.c0 -o maskededge
```

using your `imageutil.c0` and `mask.c0` files. Your code must compile using these instructions with files shown in the order given. Do NOT include a main function in your `mask.c0` file. The transformations done by these main function is described in the next section. Sample usage is:

```
./maskblur -i images/cmu.png -m blur-more-mask.txt
./maskededge -i images/cmu.png
```

Running the first command should produce an image, `images/cmu_maskblur.png`, that is identical to the file `images/cmu-gaussian.png` distributed with the handout. Running the second command should produce an image, `images/cmu_maskededge.png`, that is identical to the file `images/cmu-edge.png` distributed with the handout.

2.3.1 Applications

The first main function you are given to test your code, `maskblur-main.c0`, reads a mask from a text file, specified by the `-m` option. The mask is read in from the file and passed along to `apply_mask`. Then, the data returned from `apply_mask` is used to calculate new intensity values for the pixels. This is done by summing all of the weights of the mask and dividing by it. Note that this will cause the edge of the image to have a lower intensity than it should, since we're not considering the part of the mask that hangs off of the image, but this is an acceptable simplification of the problem. Since we're allowing our masks to have negative values, this creates the possible issue of having an intensity greater than 255. If this is the case, the intensities are modified appropriately – for the blur masks, the `maskblur-main.c0` program will do division to get an average intensity that is between 0 and 255. Since we're returning just one value instead of one per channel, this has the effect of converting the image to grayscale.

One application of masks is blurring an image, which would be the effect created by the examples shown in Figure 3 and Figure 4.

The other main function you are given to test your code, `maskedge-main.c0`, implements an edge detection algorithm, which is another application of masks. The algorithm described here is an implementation of Canny Edge Detection, using Sobel Operators. In this case, the function `apply_mask` will be called three times. The first call will be to blur the image. For this purpose, the following mask will be used:

$$\begin{bmatrix} 2 & 4 & 5 & 4 & 2 \\ 4 & 9 & 12 & 9 & 4 \\ 5 & 12 & 15 & 12 & 5 \\ 4 & 9 & 12 & 9 & 4 \\ 2 & 4 & 5 & 4 & 2 \end{bmatrix}$$

After getting the resulting grayscale image, two more filters (the Sobel operators) are applied to it. These filters determine the change in intensity, which approximates the horizontal and vertical derivatives.

$$\mathbf{G}_x = \begin{bmatrix} -1 & 0 & +1 \\ -2 & 0 & +2 \\ -1 & 0 & +1 \end{bmatrix} \quad \text{and} \quad \mathbf{G}_y = \begin{bmatrix} -1 & -2 & -1 \\ 0 & 0 & 0 \\ +1 & +2 & +1 \end{bmatrix}$$

After these two calls to `apply_mask`, the values obtained are used to search for edges based on the magnitude and direction of the change in intensity. An example of the final result is shown in Figure 5.

You can even see the intermediate results of the X and Y filters individually by trying:

```
./maskblur -i images/cmu.png -m sobelX.txt -o images/cmu-edgeX.png
./maskblur -i images/cmu.png -m sobelY.txt -o images/cmu-edgeY.png
```



Figure 5: Hammerschlag Hall: original image (left), blurred with the mask (middle), and after running edge detection (right). See text for mask values.

2.4 Your own image processing algorithm (Optional)

TASK 5 (Optional)

Write a function `manipulate` that performs an image manipulation of your choice matching the following prototype:

```
pixel[] manipulate(pixel[] pixels, int width, int height);
```

You will also have to write two small functions that express the width and height of the result of your manipulation in terms of the width and height of the input image:

```
int result_width(int width, int height);  
int result_height(int width, int height);
```

The starter code archive contains a file `manipulate.c0` with empty stubs for these functions and a main file `manipulate-main.c0` that you can compile against to get a binary that runs your manipulation.

If you choose to do this task, be creative! Submissions will be displayed on the Autolab scoreboard and bonus points may be awarded for exemplary submissions. To include your image in the scoreboard, use the `handin` script and include the file `output.png`. We suggest generating `output.png` from one of the sample files, but if your `output.png` file is generated from some other (small!) file, include it as `manipulate.png` with your final submission.

A Sample Code: Remove Red Channel from an Image

```
#use <util>

/* make pixel a type alias for int */
typedef int pixel;

pixel[] remove_red (pixel[] A, int width, int height)
//@requires width > 0 && height > 0 && width <= int_max() / height;
//@requires \length(A) >= width*height;
//@ensures \length(\result) == \length(A);
{
    int i;
    int j;
    pixel[] B = alloc_array(pixel, width*height);

    for (j = 0; j < height; j++)
        //@loop_invariant 0 <= j && j <= height;
        {
            for (i = 0; i < width; i++)
                //@loop_invariant 0 <= i && i <= width;
                {
                    // Clear the bits corresponding to the red component
                    B[j*width+i] = A[j*width+i] & 0xFF00FFFF;
                }
        }

    return B;
}
```